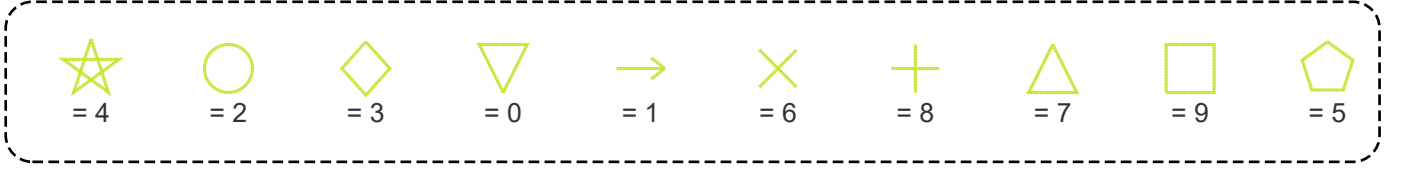
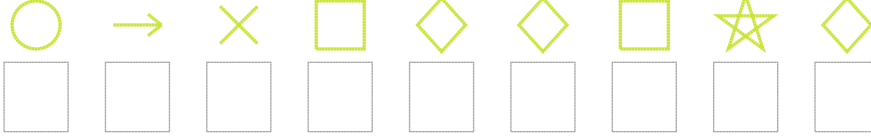


Şekil Sayı Eşleştirme

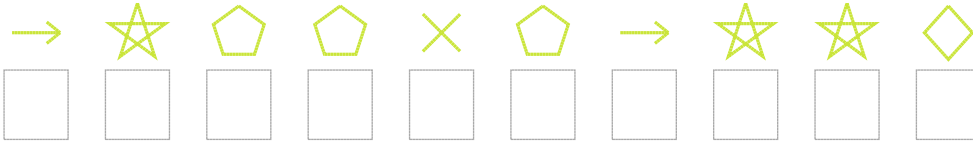


Aşağıdaki uzun şifreleri hatasız çözerek altlarına yazın:

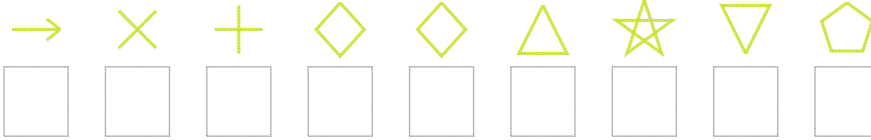
1. Şifre



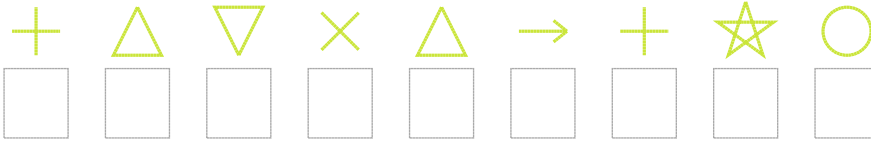
2. Şifre



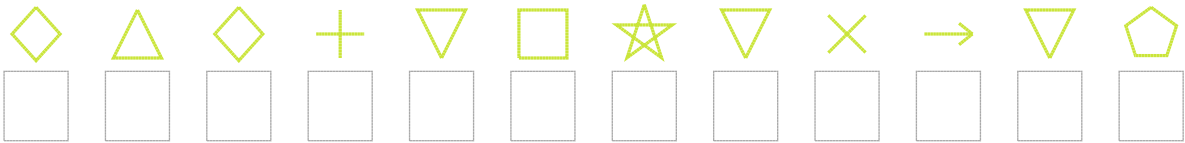
3. Şifre



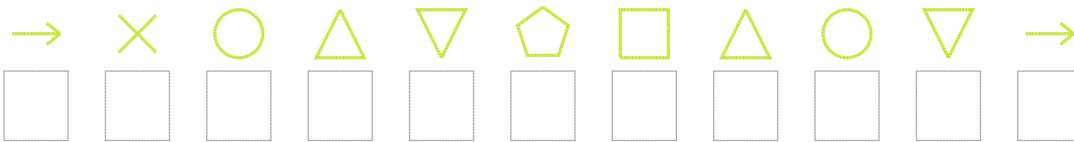
4. Şifre



5. Şifre



6. Şifre



7. Şifre



❑ BONUS: 7. ve 6. şifrenin ikinci rakamının toplamı kaçtır?

Cevap Anahtarı

1. Şifre: 216933943
2. Şifre: 1455651443
3. Şifre: 168337405
4. Şifre: 870671842
5. Şifre: 373809406105
6. Şifre: 16270597201
7. Şifre: 964491765184

□ Bonus Soru Cevabı: 12